

Les questions de mathématiques

mardi


Exemple: $15 \div 5 = 3$



les groupes égaux

$$15 - 5 - 5 - 5 = 0$$

la soustraction répétée



une matrice

Dessine une matrice pour chaque division et trouve le quotient (réponse de division).


a) $12 \div 4$

b) $15 \div 3$

c) $5 \div 1$

d) $25 \div 5$

Exemple:



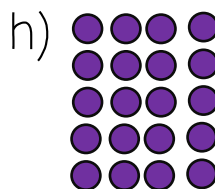
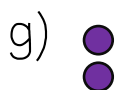
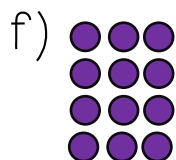
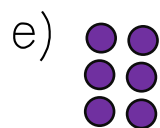
$$5 \times 3 = 15$$

$$3 \times 5 = 15$$

$$15 \div 5 = 3$$





$$15 \div 3 = 5$$

Écris 2 multiplications et 2 divisions pour chaque matrice.



Les réponses de mathématiques

mardi

<p>a) $12 \div 4 = 3$</p> 	<p>b) $15 \div 3 = 5$</p> 
<p>c) $5 \div 1 = 5$</p> 	<p>d) $25 \div 5 = 5$</p> 
<p>e) $3 \times 2 = 6$ $2 \times 3 = 6$ $6 \div 3 = 2$ $6 \div 2 = 3$</p>	<p>f) $4 \times 3 = 12$ $3 \times 4 = 12$ $12 \div 3 = 4$ $12 \div 4 = 3$</p>
<p>g) $2 \times 1 = 2$ $1 \times 2 = 2$ $2 \div 1 = 2$ $2 \div 2 = 1$</p>	<p>h) $5 \times 4 = 20$ $4 \times 5 = 20$ $20 \div 5 = 4$ $20 \div 4 = 5$</p>